

Nata Mock General
APTITUDE
Test
*Free Download Material by
Mosaic Institute of Design*

MORE TO EXPLORE

NATA EXAMS

*admissions, pattern, date,
schedule, details*

NATA FORMS

*fees, admit card, important
dates, test centres*

NATA ELIGIBILITY

*admission criteria,
qualification*

NATA STUDY MATERIAL

*full, combo, mini, instant,
test series pack*

NATA VIDEO COACHING

*narrations, illustrations
rich animations,*

ABOUT NATA

*about exam, website,
contact info*

NATA CRASH COURSES

*schedule, duration,
contents, details*

NATA SYLLABUS

*exam pattern,
course content*

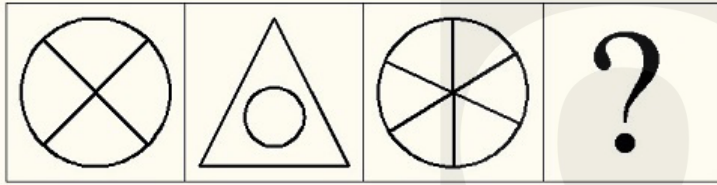


Mock Nata General Aptitude Test - 01

1). Red, Yellow and _____ form a primary colour scheme

- (1) Blue
- (2) Green
- (3) Orange
- (4) Purple

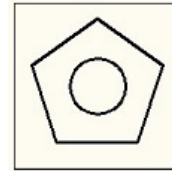
2). Understand the relationship between 1 & 2. Choose the missing figure from the options given such that a similar relationship is established between 3 & 4



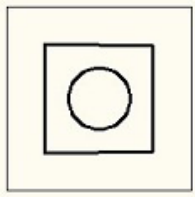
(1)



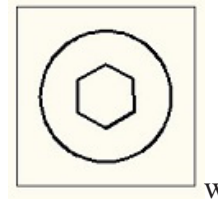
(2)



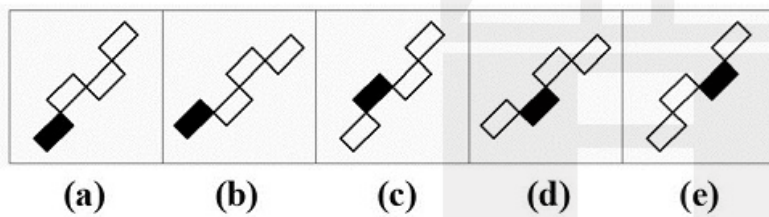
(3)



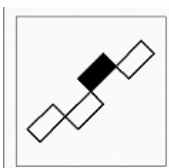
(4)



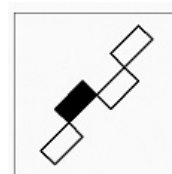
3). Complete the series of the problem figures by choosing the correct answer from the options given below



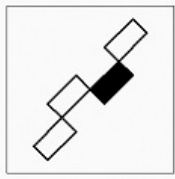
(1)



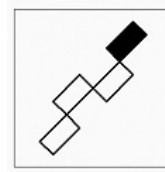
(2)



(3)



(4)



4). Identify the structure



- (1) Supreme Court
- (3) Vidhan Sabha

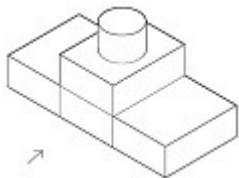
- (2) Parliament House
- (4) Rashtrapati Bhavan

5). What is the finish of sanitary fittings

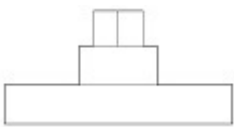
- (1) Glossy & Rough
- (3) Matte & Rough

- (2) Glossy & Smooth
- (4) Matte & Smooth

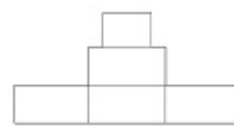
6). A 3-D problem figure is given below. Identify the correct front view from the options



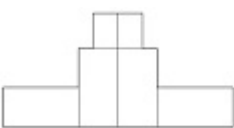
(1)



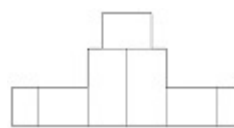
(2)



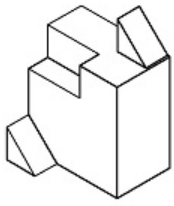
(3)



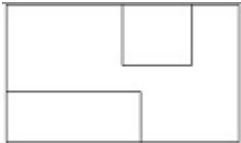
(4)



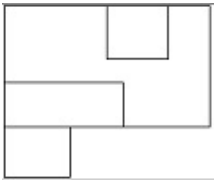
7). A 3-D problem figure is given below. Identify the correct top view from the options



(1)



(3)



8).

Identify the structure



- (1) Colossus of Rhodes
- (3) Pharos of Alexandria

- (2) Statue of liberty
- (4) Tower of Piza

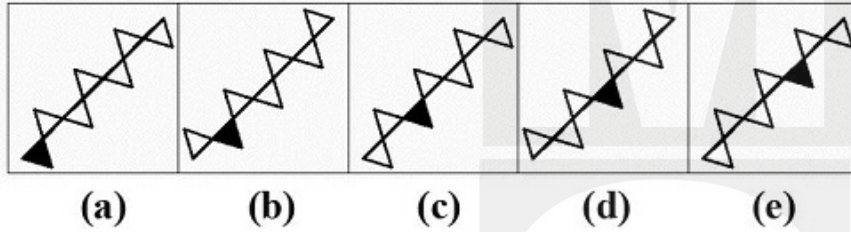
9). If a colour is made darker by adding black, the result is called a _____.

- (1) Shade
- (3) Tone

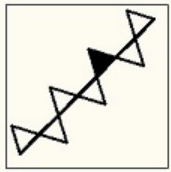
- (2) Chroma
- (4) Tint



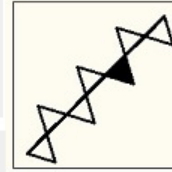
10). Complete the series of the problem figures by choosing the correct answer from the options given below



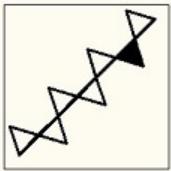
(1)



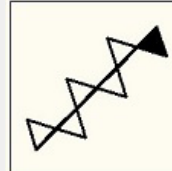
(2)



(3)



(4)



11).CN Tower is also known as

- (1) Canadian National Tower
- (3) Canada Nationalist Tower

- (2) Canada Nations Tower
- (4) Canadian Nations Tower

12).Higher the purity of a colour, higher the _____.

- (1) Saturation
- (3) Chroma

- (2) Value
- (4) Luminance

13). Identify the building



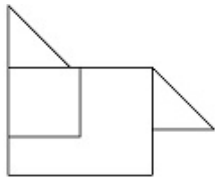
(1) Lic building

(2) Air India Building

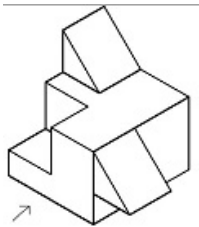
(3) Kanchanjunga Apartments

(4) None of the above

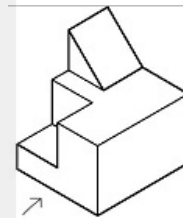
14). Find the correct 3-D figure from the options, which has the same front view as given in the problem figure, looking in the direction of the arrow



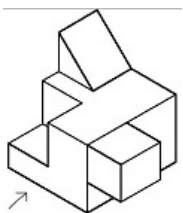
(1)



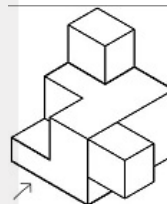
(2)



(3)



(4)



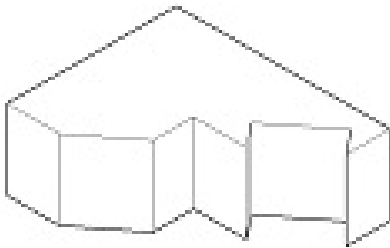
15). Identify the building



- (1) CN Tower
- (3) Petronas Towers

- (2) Sky Tower
- (4) Sydney Tower

16). In the given problem figure, find out the total number of surfaces of objects



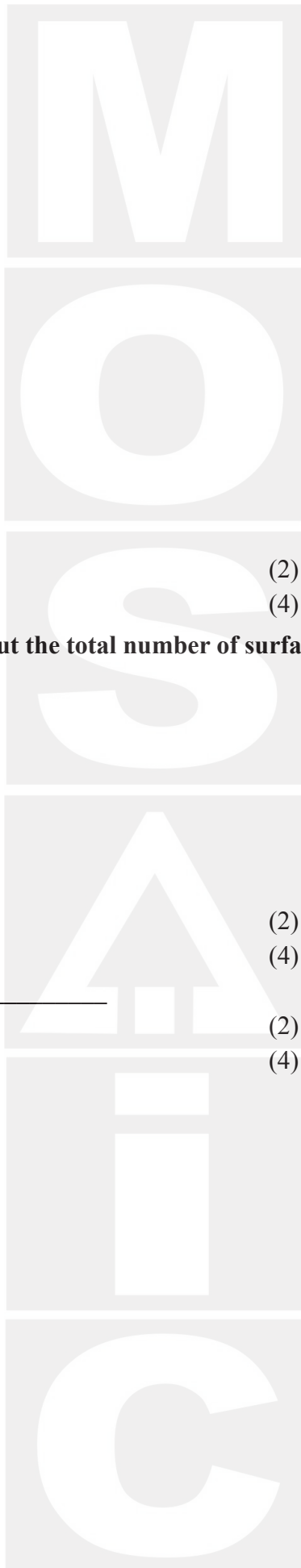
- (1) 12
- (3) 16

- (2) 13
- (4) 15

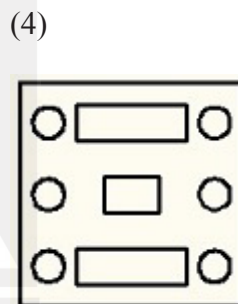
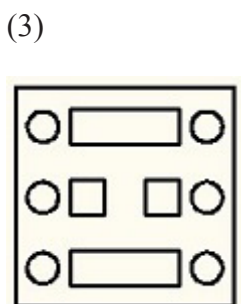
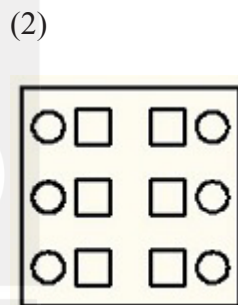
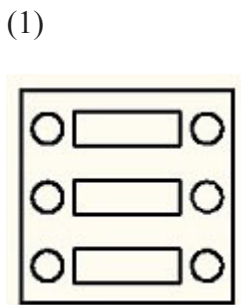
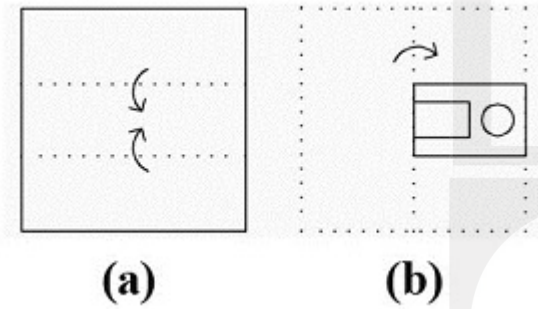
17).TEOTIHUACAN is famous for _____

- (1) Egyptian Pyramids
- (3) Ziggurats

- (2) Mesoamerican Pyramids
- (4) Mastabas



18). A sheet of paper is folded & cut in the given steps. Select the correct answer from the options given below which resembles the pattern paper acquires when it is unfolded



19). Why India Gate was built ?

- (1) To pay homage to British Soldiers who died during World War I
- (3) To celebrate shifting of capital to New Delhi by Britishers

- (2) To commemorate India's freedom
- (4) As a gift from Britishers to India

Identify the structure



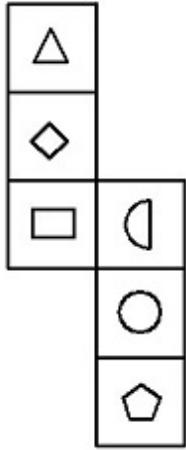
- (1) Gebel Barkal
- (3) Transamerica Pyramid

- (2) Louvre pyramid
- (4) Pyramid of Cestius

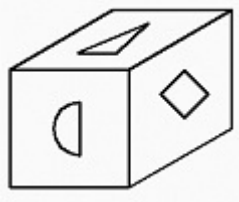
21). Why was Statue Of Liberty Built?

- (1) It was a gift from France to celebrate America's freedom
- (2) None
- (3) After the end of 1812 war
- (4) After the end of civil war

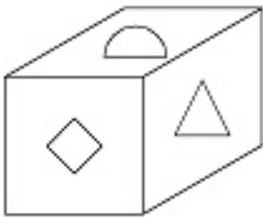
22). Which of the following dices is identical to the unfolded figure shown below



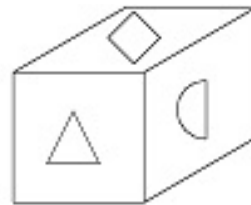
(1)



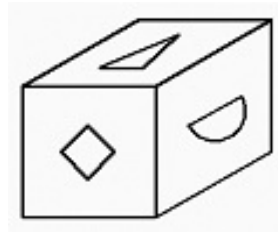
(3)



(2)



(4)

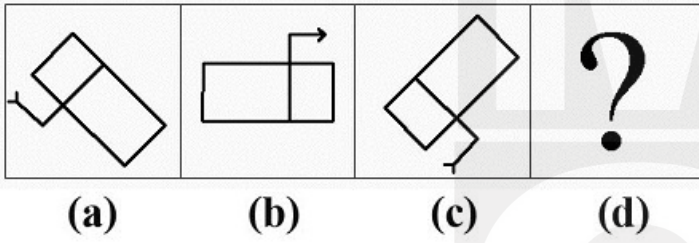


23). Why is Statue Of Liberty green in colour ?

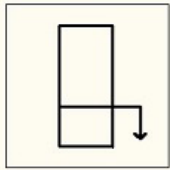
- (1) Because it is decaying
- (2) Weathering of Copper
- (3) Oxidation Effects
- (4) Because of Fungus

24). Understand the relationship between a & b. Choose the missing figure from the options given such that a similar relationship is established between c & d

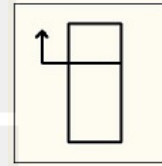
Problem Figure



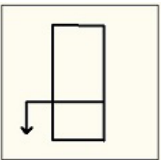
(1)



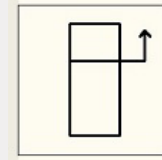
(2)



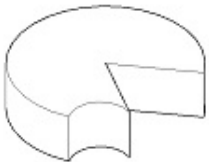
(3)



(4)



25). In the given problem figure, find out the total number of surfaces of objects



(1) 8

(2) 7

(3) 5

(4) 6

26). Identify the structure



- (1) Taj Mahal
- (3) Red Fort

- (2) Humayun's Tomb
- (4) Fatehpur Sikri

27). _____ is a tint of red.

- (1) Orange
- (3) Maroon

- (2) Pink
- (4) Brown

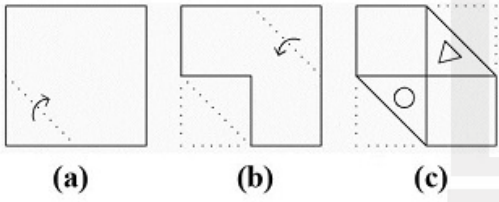
28). Identify the material



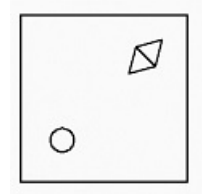
- (1) Glass
- (3) Marble

- (2) Woolen carpet
- (4) Granite

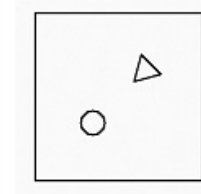
29). A sheet of paper is folded & cut in the given steps. Select the correct answer from the options given below which resembles the pattern paper acquires when it is unfolded



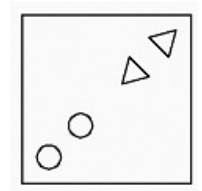
(1)



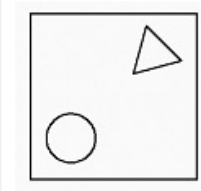
(2)



(3)

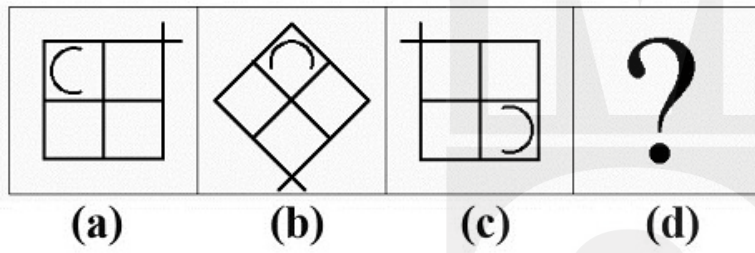


(4)



30). Understand the relationship between a & b. Choose the missing figure from the options given such that a similar relationship is established between c & d

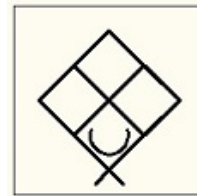
Problem Figure



(1)



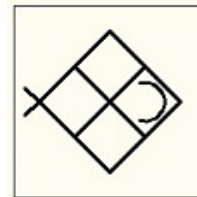
(2)



(3)



(4)



Answer Key – Free General Aptitude Test

1[1]	2[2]	3[1]	4[4]	5[2]
6[2]	7[4]	8[2]	9[1]	10[3]
11[1]	12[3]	13[1]	14[1]	15[3]
16[1]	17[2]	18[1]	19[1]	20[2]
21[1]	22[4]	23[2]	24[2]	25[4]
26[1]	27[2]	28[1]	29[3]	30[3]

Mosaic

Institute Of Design

*71, Sardar Centre,
Vastrapur, Ahmedabad
9033082625, 9824083847
www.mosaicdesigns.in*

